

# Şekil Sayı Eşleştirme

+

= 7

▽

= 2

□

= 1

→

= 5

△

= 6

○

= 8

⬠

= 0

☆

= 4

×

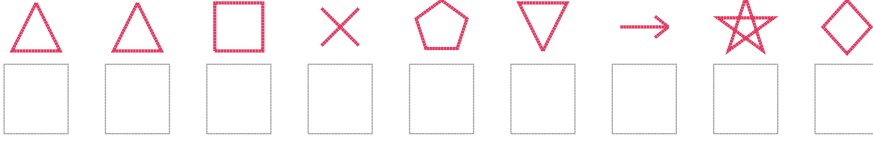
= 9

◇

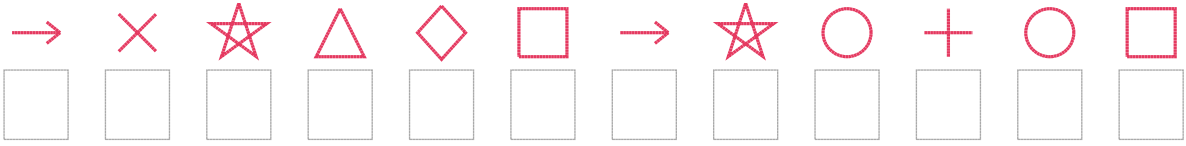
= 3

Aşağıdaki uzun şifreleri hatasız çözerek altlarına yazın:

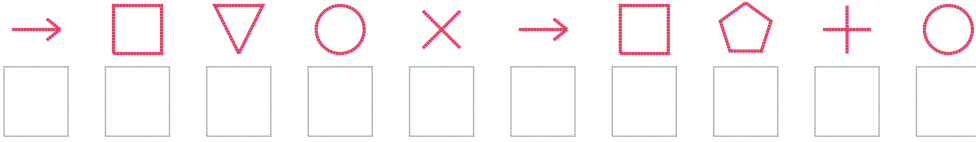
1. Şifre



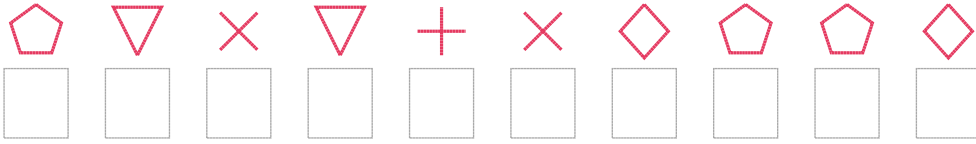
2. Şifre



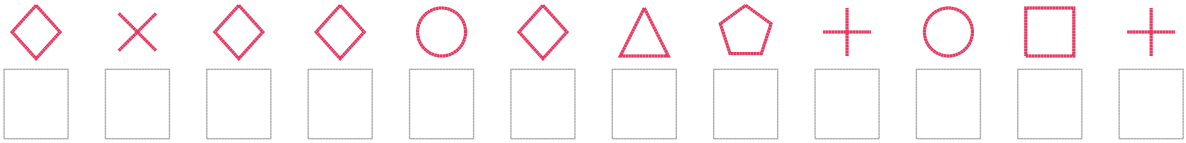
3. Şifre



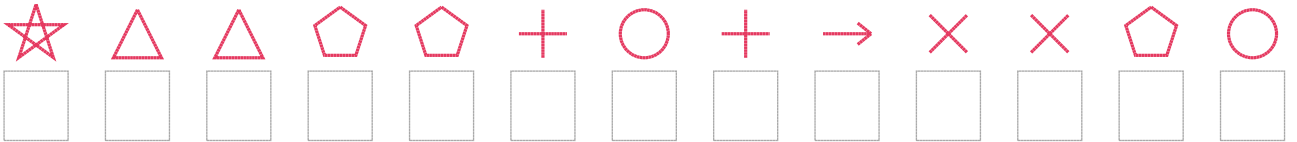
4. Şifre



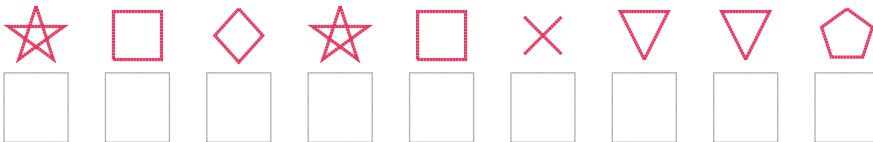
5. Şifre



6. Şifre



7. Şifre



□ BONUS: 2. ve 7. şifrenin üçüncü rakamının toplamı kaçtır? .....

## Cevap Anahtarı

1. Şifre: 661902543
2. Şifre: 594631548781
3. Şifre: 5128951078
4. Şifre: 0292793003
5. Şifre: 393383607817
6. Şifre: 4660078759908
7. Şifre: 413419220

□ Bonus Soru Cevabı: 7